


how many squares?

true or false?

Anybody can be good at
maths if they try.

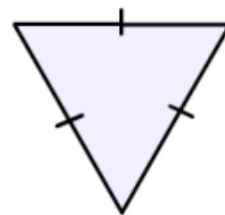
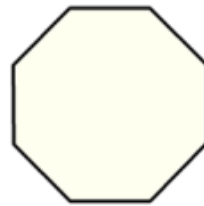
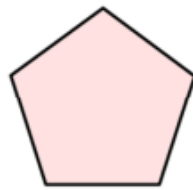
join four dots to make a perfect square



▲ find the missing digits ▲

$$\begin{array}{r} \square 0 9 \\ 3 1 \square + \\ \hline 4 \square 1 \end{array} \quad \begin{array}{r} \square 6 7 \\ 1 \square \square - \\ \hline 2 0 8 \end{array}$$

can you name these shapes?



do you agree?

To be good at maths
you have to be good at
remembering things.

